


Rare Earths Actinides - Radioactive dense metals that combine easily with most nonmetals.

Directions: Add the number of protons of each element and name the **element**.


Copyright 2006 Edge Games, LLC
Visit: <http://www.science-fusion.com/>




1.
$$\begin{array}{r} 2 \\ 8 \\ 18 \\ 32 \\ 21 \\ 9 \\ + 2 \\ \hline \end{array}$$

 ATN _____
 Element _____ 


6.
$$\begin{array}{r} 2 \\ 8 \\ 18 \\ 32 \\ 18 \\ 9 \\ + 2 \\ \hline \end{array}$$

 ATN _____
 Element _____ 


11.
$$\begin{array}{r} 2 \\ 8 \\ 18 \\ 32 \\ 26 \\ 9 \\ + 2 \\ \hline \end{array}$$

 ATN _____
 Element _____ 


2.
$$\begin{array}{r} 2 \\ 8 \\ 18 \\ 32 \\ 28 \\ 8 \\ + 2 \\ \hline \end{array}$$

 ATN _____
 Element _____ 


7.
$$\begin{array}{r} 2 \\ 8 \\ 18 \\ 32 \\ 29 \\ 8 \\ + 2 \\ \hline \end{array}$$

 ATN _____
 Element _____ 


12.
$$\begin{array}{r} 2 \\ 8 \\ 18 \\ 32 \\ 32 \\ 9 \\ + 2 \\ \hline \end{array}$$

 ATN _____
 Element _____ 


3.
$$\begin{array}{r} 2 \\ 8 \\ 18 \\ 32 \\ 18 \\ 10 \\ + 2 \\ \hline \end{array}$$

 ATN _____
 Element _____ 


8.
$$\begin{array}{r} 2 \\ 8 \\ 18 \\ 32 \\ 32 \\ 8 \\ + 2 \\ \hline \end{array}$$

 ATN _____
 Element _____ 


13.
$$\begin{array}{r} 2 \\ 8 \\ 18 \\ 32 \\ 20 \\ 9 \\ + 2 \\ \hline \end{array}$$

 ATN _____
 Element _____ 


4.
$$\begin{array}{r} 2 \\ 8 \\ 18 \\ 32 \\ 31 \\ 8 \\ + 2 \\ \hline \end{array}$$

 ATN _____
 Element _____ 


9.
$$\begin{array}{r} 2 \\ 8 \\ 18 \\ 32 \\ 23 \\ 8 \\ + 2 \\ \hline \end{array}$$

 ATN _____
 Element _____ 


14.
$$\begin{array}{r} 2 \\ 8 \\ 18 \\ 32 \\ 30 \\ 8 \\ + 2 \\ \hline \end{array}$$

 ATN _____
 Element _____ 

5.
$$\begin{array}{r} 2 \\ 8 \\ 18 \\ 32 \\ 24 \\ 8 \\ + 2 \\ \hline \end{array}$$

 ATN _____
 Element _____ 

10.
$$\begin{array}{r} 2 \\ 8 \\ 18 \\ 32 \\ 25 \\ 9 \\ + 2 \\ \hline \end{array}$$

 ATN _____
 Element _____ 

15.
$$\begin{array}{r} 2 \\ 8 \\ 18 \\ 32 \\ 25 \\ 8 \\ + 2 \\ \hline \end{array}$$

 ATN _____
 Element _____ 